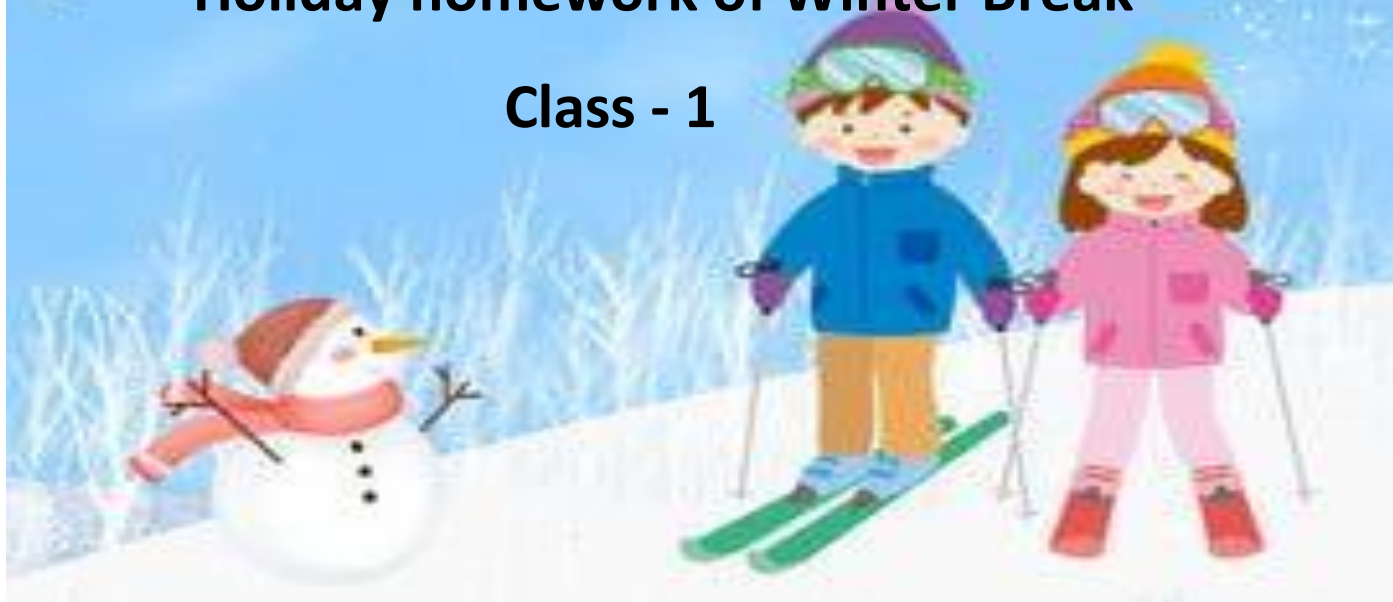




**St. Mary's Senior Secondary School,  
Rudrapur**

**Holiday homework of Winter Break**

**Class - 1**



# English Holiday Homework

## Class - 1

Name \_\_\_\_\_


Roll No. \_\_\_\_\_

**1. Learn Poem - The Four Seasons and Chapter - A visit to the market & Chapter - Food.**

**1. Do page no. 61 to 72 in your English Writing book.**

**2. Draw the picture of your favourite bird and write any 5 sentence on it.**

- \_\_\_\_\_.
- \_\_\_\_\_.
- \_\_\_\_\_.
- \_\_\_\_\_.
- \_\_\_\_\_.



**3. Circle the noun in the following sentences:**

1. My brother likes to paint.
2. Jeet is going to school.
3. This is my bag.
4. Her sister loves music.
5. I saw a monkey on the tree.
6. Father is working in a office.
7. There are four people in the car.
8. The cook is in the kitchen.

**4. Choose the correct describing words and fill in the blanks:**

1. The \_\_\_\_\_ elephant is in the zoo. (big / blue)
2. She has a \_\_\_\_\_ balloon. (fat / red)
3. This is a \_\_\_\_\_ banana. (Sweet / sour)
4. The \_\_\_\_\_ tree gives shade. (tall / small)

5. The Sun is very \_\_\_\_\_. (Cold / hot)

**3. Make sentence with the following words:**

a. Umbrella \_\_\_\_\_

b. Pool \_\_\_\_\_

c. Boat \_\_\_\_\_

d. Mango \_\_\_\_\_

## Reading Comprehension

Once there was a lion in a jungle. One day, the lion was sleeping under a tree. A little mouse ran over his tail. The lion woke up and caught the mouse. The mouse said, "Please let me go. One day I will help you." The lion laughed but let the mouse go. After some days, the lion was caught in a net. He roared loudly. The mouse heard him and came running. The mouse cut the net with his sharp teeth. The lion was free and thanked the mouse. They became good friends.

**Q A. Choose the correct option:**

**1. The lion lived in the**

- a) house                      b) jungle                      c) zoo

**2. The mouse helped the lion by**

- a) calling others              b) cutting the net              c) pushing the net

**Q B. Answer the following questions:**

1. Where was the lion sleeping?
2. Who ran over the lion's tail?
3. Why did the lion catch the mouse?
4. How was the lion caught later?
5. Who helped the lion?

**Q C. Fill in the blanks:**

1. The lion was sleeping under a \_\_\_\_\_.
2. The mouse cut the net with his \_\_\_\_\_ teeth.
3. The lion and the mouse became good \_\_\_\_

**SUBJECT – HINDI**

**NAME** \_\_\_\_\_ **Roll No** \_\_\_\_\_ **Sign** \_\_\_\_\_

**(1) गद्यांश पढ़कर प्रश्नों के उत्तर दीजिए –**

राम और श्याम दो भाई थे। आज वे बहुत खुश थे क्योंकि बाहर बर्फ़ गिर रही थी। राम को बर्फ़ में खेलना अच्छा लगता था और श्याम को बर्फ़ के तालाब पर स्केटिंग करना पसंद था। दोनों ने अपने जेब खर्च से पैसे बचाए थे जिस से श्याम ने एक नई आइस स्केट्स की जोड़ी खरीदी। दोनों ने मिलकर घर के पीछे एक स्नोमैन बनाया।

क) प्रश्न – राम और श्याम कौन थे ? उ

उत्तर - \_\_\_\_\_

ख) प्रश्न – राम को किसमें खेलना पसंद था ?

उत्तर- \_\_\_\_\_

ग) प्रश्न – दोनों ने पैसे कैसे बचाए थे ?

उत्तर- \_\_\_\_\_

घ) प्रश्न- श्याम ने नई क्या खरीदी ?

उत्तर - \_\_\_\_\_

ड) प्रश्न – दोनों ने घर के पीछे क्या बनाया ?

उत्तर - \_\_\_\_\_

**(2) संकेतो की सहायता से वाक्य पूरे करिए - ( हरे और नीले, नाचता , सुंदर, राष्ट्रीय, रंग-बिरंगे ) (क) मोर एक \_\_\_\_\_ पक्षी है।**

(ख) यह \_\_\_\_\_ रंग का होता है।

(ग) इसके पंख \_\_\_\_\_ होते हैं।

(घ) यह बादलों को देखकर \_\_\_\_\_ है।

(ड) यह हमारा \_\_\_\_\_ पक्षी है।

(3) शब्दों के विलोम शब्द लिखिए

1- दिन- ----- 2 - ठंडा - ----- 3- सीधा - -----


4 -ऊपर - ----- 5 - काला - -----6 -एक - -----

(4) सही विशेषण छाटकर लिखिए -

क ) घोड़ा तेज दौड़ता है । ----- ख ) गाजर लाल है । -----

ग ) मिर्च तीखी है । ----- घ ) दूध गरम है । -----

(5 ) चित्र देखकर वाक्य लिखिए



(क) -----

(ख) -----

(ग) -----

(घ) -----

(6) शब्दों के अर्थ लिखिए

1- सहेलियाँ- -----2- जुगत- ----- 3- रास्ता- -----

4- उछल- -----

(7) तुक वाले शब्द लिखिए 1 हरा- -----

2 -लगाओ -----

अन्य गृह कार्य – 1-स्वर व्यंजन ,मात्राएँ और बारहखड़ी याद करिए ।

2 -सुलेख पुस्तिका का पेज नंबर 24 से 30 तक ।

3- प्रतिदिन एक हिंदी पाठ पढ़े और कॉपी में कराया कार्य याद करे ।

CLASS-1

SUBJECT – MATHEMATICS

NAME-

1.Colour the third ( 3<sup>rd</sup> ) square blue.



2.Colour the sixth ( 5<sup>th</sup> ) star yellow.



3.Complete the pattern.



4.Word problems.

a. Mohan had 7 red balloons. He gave 4 balloons to his sister .How many balloons does Mohan have now?

b.Neha bought a pencil for ₹ 5 and a notebook for ₹ 20.How much did she spend?

c.Riya has 9 toys.She gives 5 toys to her brother. How many toys does she have now?

d. There are 5 birds sitting on a branch,3 more birds come to join them.How many birds are there in total?

5.Solve the following.

14	28	22	79	72	3	45	78	89	68	7	9
+21	+60	+71	+10	+3	+2	-22	-50	-45	-6	-3	-0
<input type="text"/>	<input type="text"/>	<input type="text"/>	<input type="text"/>	<input type="text"/>	<input type="text"/>	<input type="text"/>	<input type="text"/>	<input type="text"/>	<input type="text"/>	<input type="text"/>	<input type="text"/>

6. Write the correct time in the space provided.



7. Write the numbers in:-

a. Increasing Order	b. Decreasing Order
20   78   96   37   55	98   32   42   57   39
<input type="text"/> <input type="text"/> <input type="text"/> <input type="text"/> <input type="text"/>	<input type="text"/> <input type="text"/> <input type="text"/> <input type="text"/> <input type="text"/>

8. Fill in the blanks.

- The first day of the week is \_\_\_\_\_.
- Wednesday is the \_\_\_\_\_ day of the week.
- \_\_\_\_\_ is the last day of the week.
- There are \_\_\_\_\_ days in a week.
- Tuesday comes after the day of \_\_\_\_\_.

9. Put the correct sign of  $>$   $<$  or  $=$ .

- a.  $12 \square 19$    b.  $25 \square 54$    c.  $76 \square 76$    d.  $98 \square 45$    e.  $99 \square 65$

10. Write in words.

- a. 34 \_\_\_\_\_   b. 69 \_\_\_\_\_   c. 87 \_\_\_\_\_  
 d. 99 \_\_\_\_\_   e. 100 \_\_\_\_\_   f. 40 \_\_\_\_\_

11. Write the answer for each problem, Then colour accordingly to the key at bottom.

$11 \times 4 =$   
 $2 \times 5 =$   
 $10 \times 1 =$   
 $4 \times 7 =$   
 $5 \times 8 =$   
 $12 \times 3 =$   
 $7 \times 2 =$   
 $9 \times 6 =$   
 $3 \times 4 =$   
 $8 \times 6 =$   
 $6 \times 8 =$   
 $2 \times 9 =$   
 $4 \times 9 =$

RED	12, 18	BLUE	40, 44
YELLOW	10, 48	PURPLE	14
GREEN	28, 54	GREY	36

12. Learn tables 2 upto 10.   13. Learn number names 1 to 100.

## EVS HOLIDAY HOME WORK

Name \_\_\_\_\_ Roll No \_\_\_\_\_ Sign \_\_\_\_\_

**Note: Learn Ch.11 Means Of Transport & Ch- 12 Our House and do the given worksheet.**

**Q1. Write L for land W for water and A for air transport.**

1. Train \_\_\_\_\_
2. Bus \_\_\_\_\_
3. Auto rickshaw \_\_\_\_\_
4. Bicycle \_\_\_\_\_
5. Scooter \_\_\_\_\_
6. Aeroplane \_\_\_\_\_
7. Helicopter \_\_\_\_\_
8. Boat \_\_\_\_\_

**Q2. Fill in the Blanks**

1. We cook food in the \_\_\_\_\_.
2. A \_\_\_\_\_ is a kutchra house
3. The fastest means of transport is \_\_\_\_\_.
4. We \_\_\_\_\_ in the bathroom.
5. A train runs on \_\_\_\_\_

**Q3. Write True or False**

1. Train and buses are means of land transport. (\_\_\_\_\_)
2. We cannot use boat and ships to cross seas and oceans. (\_\_\_\_\_)
3. We also travel by a means of water transport. (\_\_\_\_\_)
4. We feel safe in our house. (\_\_\_\_\_)
5. A bicycle is not means of land transport. (\_\_\_\_\_)

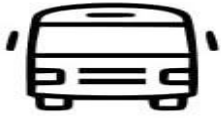
**Q4. Give two examples of each.**

1. Water transport \_\_\_\_\_, \_\_\_\_\_
2. Air transport \_\_\_\_\_, \_\_\_\_\_
3. Rooms in house \_\_\_\_\_, \_\_\_\_\_
4. Pucca house \_\_\_\_\_, \_\_\_\_\_




5. Movable house \_\_\_\_\_, \_\_\_\_\_

Q4. Colour the pictures and identify if they are used in air water or land.



LAND



Q.5 Draw and colour any two of your favourite vehicles.